

SDAT2023

Registration No.



Saintgits
Design School

Design Aptitude Test 2023

Set 2

30 Marks | 1 Hour

Instructions

- Laptops, mobile phones are not allowed inside the examination hall.
- You have to attempt all questions.
- You can answer them in any order.
- You have to use a pen to tick answers.
- Drawings can be made with pencil or pen.
- For Part 3, colour pencils or sketch pens may also be used.

Name & Signature
of the Invigilator

Name & Signature
of the Evaluator

Scoring Sheet (For Office use only)

Aptitude Test	Studio Test	Portfolio Review	Total
<input type="text"/> /30	<input type="text"/> /30	<input type="text"/> /40	<input type="text"/> /100
Remarks			
<input type="text"/>			

Each question carries 1/2 mark. Tick the right answer in the box given. Ticking more than one box will not be counted.

1. Who is the Minister of External Affairs?

- a. Smt. Nirmala Sitharaman
- b. Dr. Subrahmanyam Jaishankar
- c. Smt. Smriti Zubin Irani
- d. Shri Nitin Jairam Gadkari



2. Where is the logo used?

- a. Kerala handlooms
- b. Kerala Kaithari
- c. Cochin International Airport Limited
- d. Kerala Startup Mission



3. In which year did India celebrate its 75th independence?

- a. 2023
- b. 2022
- c. 2021
- d. 2020



4. Identify the building in the picture

- a. Taj Mahal
- b. Qutab Minar
- c. Humayun's Tomb
- d. Red Fort



5. Who's this famous personality?

- a. Elon Musk
- b. Bill Gates
- c. Mark Zuckerberg
- d. Jeff Bezos



6. Which of the following books was written by Arundhati Roy?

- a. The God of Small Things
- b. The White Tiger
- c. God of All Things
- d. Lore of the Land: Storytelling Traditions of India

7. What is the theme of the G20 summit happening in India?

- a. Shaping an Interconnected World
- b. Fighting poverty with rigidity
- c. "One Earth-One Family-One Future"
- d. Making the world together



8. Who painted this image?

- a. Michelangelo
- b. Pablo Picasso
- c. Leonardo da Vinci
- d. Vincent van Gogh

9. Which one of these is the correct version of the logo?



a



b



c



d



10. Identify this musical instrument

- a. Idakka
- b. Chenda
- c. Tabla
- d. Tambura

11. What is the full form of GST?

- a. Government State Tax
- b. Goods and Service Tax
- c. Government Service Tax
- d. General State Tax

12. By land area, which is the smallest district in Kerala?

- a. Kottayam
- b. Thrissur
- c. Ernakulam
- d. Alappuzha

13. How many hours difference is there between India IST and Greenwich meantime?

- a. +4:30
- b. +5:30
- c. -5:30
- d. -4:30

14. Which of these dance forms is NOT a classical dance form?

- a. Bharatanatyam
- b. Odissi
- c. Manipuri
- d. Bihu

15. Elon Musk is in the business of making

- a. Reusable Rockets, Solar roof tiles, Transportation Tunnels
- b. Transportation Tunnels, Shapeshifting mobile phones, Solar roof tiles
- c. Haptic holograms, Transportation Tunnels, Reusable Rockets
- d. High-Performance Gasoline, Transportation Tunnels, Solar roof tiles



16. Identify the organization which uses the given symbol?

- a. Panda Rescue Initiative
- b. Forest Research Institute
- c. World Wide Fund for Nature
- d. People for Ethical Treatment of Animals



17. Which place does the art form belong to?

- a. Tamil Nadu
- b. Jharkhand
- c. Maharashtra
- d. Bihar

18. What is the chemical formula of Baking soda?

- a. NaHCO_3
- b. CaSO_4
- c. CaCO_3
- d. CH_3COOH

19. Which one of these principles is Velcro, a common fastener, based on?

- a. Hook and Loop
- b. Cut and Past
- c. Push and Pull
- d. Tick and Stick



20. What does this symbol mean?

- a. Chemical Weapon
- b. Biological hazard
- c. Environmental hazard
- d. Radioactive hazard

Each question carries one mark. Tick the right answer in the box given. Ticking more than one box will not be counted.

21. Choose the correct profile matching the 3D image.



a



b

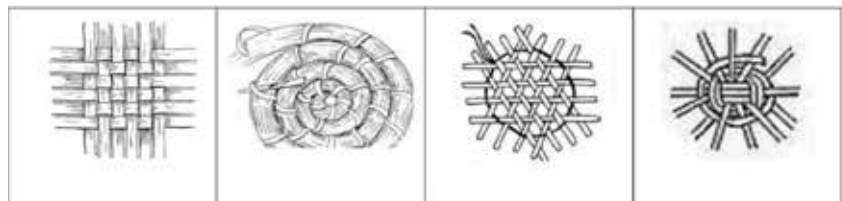


c



d

22. Choose the correct First step that can lead to the final product as shown below.



a

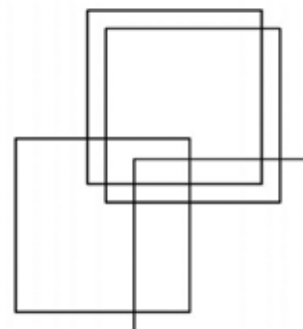
b

c

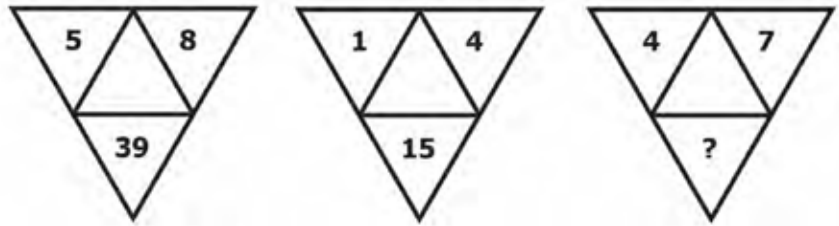
d

23. How many rectangles are there in this figure?

- a. 15
- b. 17
- c. 21
- d. 19

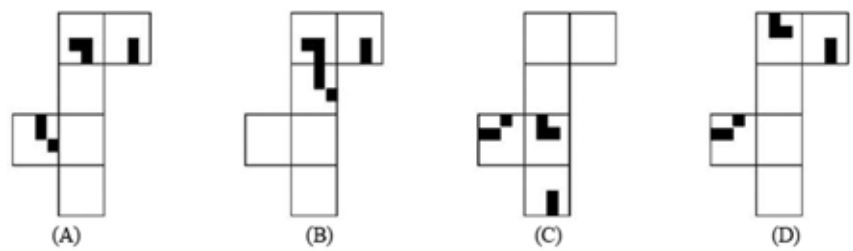


24. In the figure given below, which number will replace the question mark?




- a. 30 b. 28 c. 33 d. 16

25. Which of the papers sets when folded along the intermediate border can form the cube as given in the image below?




- a b c d

27. Create a poster to promote tourism as part of the 'Incredible India' campaign, using India's national flower, India's national tree, India's national bird and India's national animal, as they are (in terms of form and colour combinations). You can use either the full form or any part of them (texture, pattern, silhouette etc, any number of times and in any combination). You may also explain your concept in a few words, if required. You will be assessed on drawing skills, cleanliness and use of colour.



28. Draw a woman holding a child, crying in her arms, with appropriate details including the background. Your drawing should be in black and white only (Do not use any colour). You will be assessed on your imagination, drawing skills and cleanliness.



Space for rough work

Space for rough work

SDAT 2023

Registration No.



Saintgits
Design School

Studio Test 2023

30 Marks | 1 Hour

Using the given materials make a

Moving Toy

for Kids of any age group.

Instructions

1. The toy should be within a size of 6 inches x 6 inches x 6 inches
2. You should try and use the maximum variety of given materials in your model
3. Write your Registration No. on the underside of the model
4. This sheet can be used for rough sketches, if any
5. Additional materials will not be issued under any circumstances
6. You have to return the remaining materials